




**How many bowties are there below?**

Write your answer in this box:

**How many glasses are there below?**

Write your answer in this box:



**Great job with the counting!**

**(Did you remember to count what Mr. Peabody is wearing?)**

Now draw **5 bowties** of your own below. Once you're done, color them in!

Answers: 9 bowties, 6 glasses



## MATH BRAIN BUSTERS (2/5)

### Counting and Drawing



Peabody and Sherman are in Ancient Egypt, visiting King Tut. King Tut is wondering how many pyramids there are in the desert. One half of the desert contains 5 pyramids, while the other half has 4 pyramids. **How pyramids are there altogether?**



Write your answer in a complete sentence below:

Peabody and Sherman decide to visit the Nile river while in Egypt. The Nile is full of hungry crocodiles. If Sherman sees 7 crocodiles and Mr. Peabody sees 6 different crocodiles, **how many crocodiles total have Peabody and Sherman seen?**



Write your answer in a complete sentence below:

Answers: There are 9 pyramids altogether. Peabody and Sherman saw 13 crocodiles total





**MATH BRAIN BUSTERS (3/5)**  
Counting and Drawing

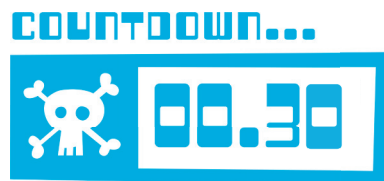


Peabody and Sherman want to visit Leonardo Da Vinci while he's painting the Mona Lisa in the year of 1503. If they are currently helping Shakespeare with a play in the year of 1589, **how many years do they have to travel back in time to visit Leonardo Da Vinci?**



Write your answer in a complete sentence below:

Peabody and Sherman were exploring a pyramid when suddenly they activated a booby trap. They have 30 seconds to solve a puzzle and escape the room. If it takes them 18 seconds to solve the puzzle, **how many seconds are left for them to escape?**



Write your answer in a complete sentence below:

Answers: They have to travel back in time 86 years. They have 12 seconds left for them to escape.





# MATH BRAIN BUSTERS (4/5)

## Counting and Drawing Multiplication Word Problems



Mr. Peabody is always receiving certificates for his many accomplishments. Sherman wonders how many certificates Peabody gets in half a year. Mr. Peabody receives about 3 certificates a month. **How many certificates does he earn in 6 months?**



Write your answer in a complete sentence below:

Today, Sherman has received a lot of homework from school. He's wondering how long it will be until he can finish and play outside. If Sherman has 4 classes and each class's homework is going to take 25 minutes, **how many minutes is finishing his homework going to take?**



Write your answer in a complete sentence below:

**Math Bonus!** Rewrite your answer in hours and minutes:  **Hours**  **Minutes**

Answers: Mr. Peabody earns 18 certificates in 6 months. It will take Sherman 100 minutes or 1 hour and 40 minutes to finish his homework.






# MATH BRAIN BUSTERS (5/5)

Counting and Drawing  
Help Mr. Peabody complete  
the Multiplication Chart



X	1	2	3	4	5	6	7	8	9	10	11	12
1												
2												
3												
4												
5												
6												
7												
8												
9												
10												
11												
12												





**MR. PEABODY'S  
BRAIN BUSTER AWARD**

is presented to

---

in recognition of the hard work and  
effort put forth in completing all of  
Mr. Peabody's math brain busters.

